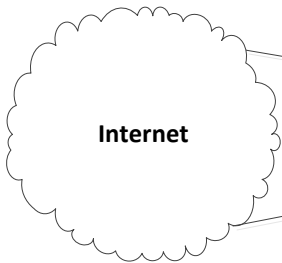


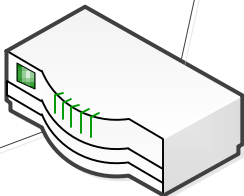
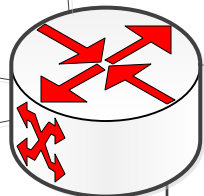
What should this be and do ?

3<sup>rd</sup> Party VPN Router (Cant terminate ADSL circuit)



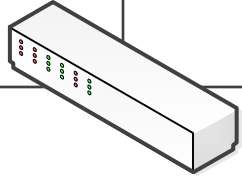
ADSL Circuit #1  
Static Public IP

ADSL Circuit #2  
Static Public IP



Data Vlan

VoIP Vlan



Cisco PoE  
Switch

